

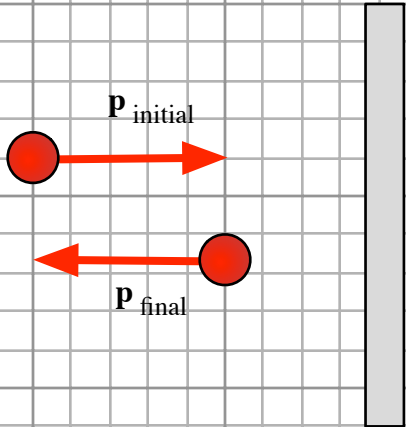
Chapter 7

Name \_\_\_\_\_

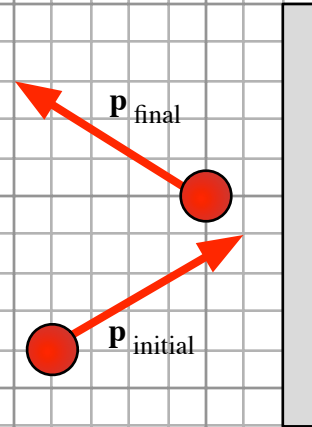
Assignment 4: Change in momentum

Find and sketch the change in momentum for the object in each case. Its final and initial momentum vectors are shown. Show your vector arithmetic.

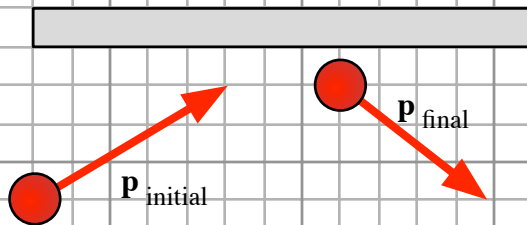
1.



2.



3.



4.

